

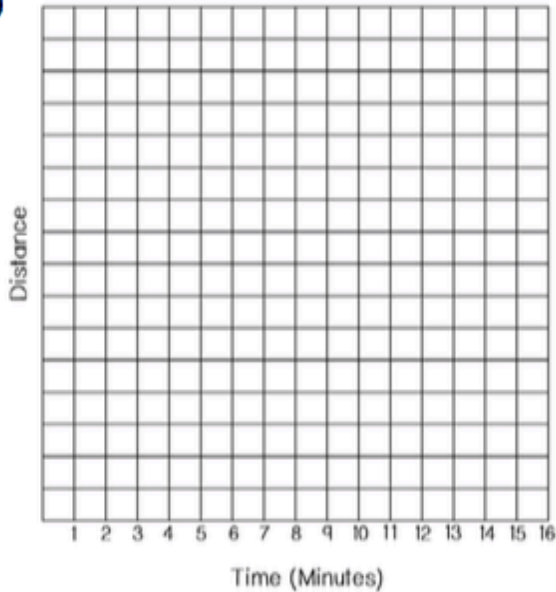
DISTANCE VS. TIME GRAPHS SPINNER ACTIVITY

Name: _____

Period: _____ Tuesday, February 19, 2019

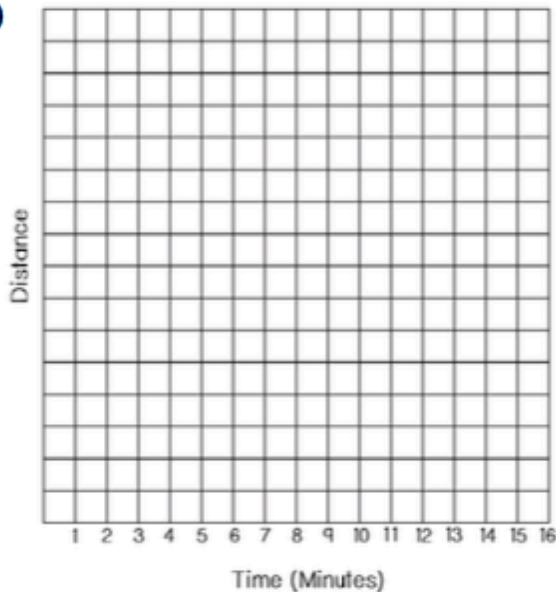
INSTRUCTIONS: Use the spinners to help you fill in the blanks and create a distance vs. time graph for each scenario.

1



- A. John left his house and _____ for 5 minutes.
(ACTIVITY)
- B. Then he _____ for _____
(ACTIVITY) (TIME)
because _____.
(YOUR STORY)
- C. Next, he _____ for _____
(ACTIVITY) (TIME)
because _____.
(YOUR STORY)
- D. Lastly, he turned around and _____
(ACTIVITY)
for _____ because _____.
(TIME) (YOUR STORY)

2

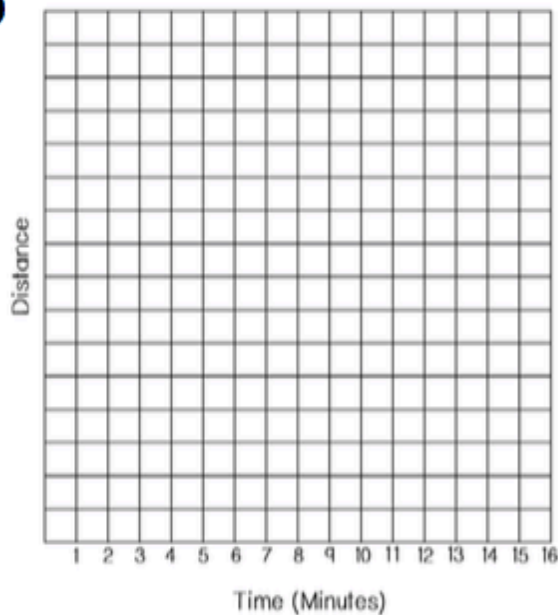


- A. Brooke left her house and _____ for 5 minutes.
(ACTIVITY)
- B. Then she _____ for _____
(ACTIVITY) (TIME)
because _____.
(YOUR STORY)
- C. Next, she _____ for _____
(ACTIVITY) (TIME)
because _____.
(YOUR STORY)
- D. Lastly, she turned around and _____
(ACTIVITY)
for _____ because _____.
(TIME) (YOUR STORY)

DISTANCE VS. TIME GRAPHS SPINNER ACTIVITY

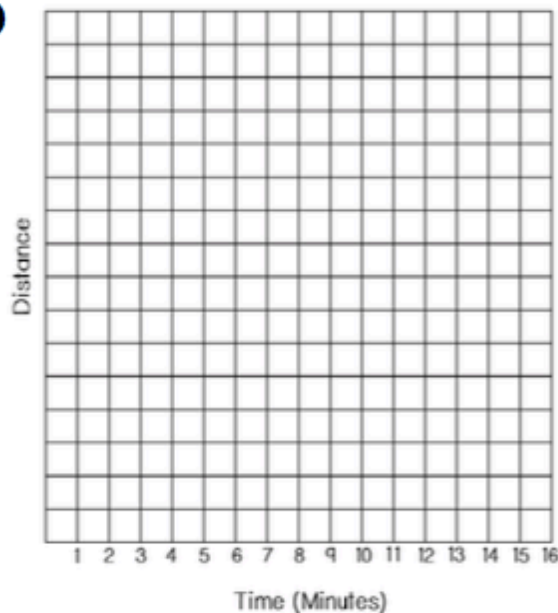
INSTRUCTIONS: Use the spinners to help you fill in the blanks and create a distance vs. time graph for each scenario.

3



- A. Sam left his house and _____ for 5 minutes.
(ACTIVITY)
- B. Then he _____ for _____
(ACTIVITY) (TIME)
because _____.
(YOUR STORY)
- C. Next, he _____ for _____
(ACTIVITY) (TIME)
because _____.
(YOUR STORY)
- D. Lastly, he turned around and _____
(ACTIVITY)
for _____ because _____.
(TIME) (YOUR STORY)

4



- A. Ashley left her house and _____ for 5 minutes.
(ACTIVITY)
- B. Then she _____ for _____
(ACTIVITY) (TIME)
because _____.
(YOUR STORY)
- C. Next, she _____ for _____
(ACTIVITY) (TIME)
because _____.
(YOUR STORY)
- D. Lastly, she turned around and _____
(ACTIVITY)
for _____ because _____.
(TIME) (YOUR STORY)