

We will add and subtract on a number line.

CFU

What are we going to do?

## Activate Prior Knowledge

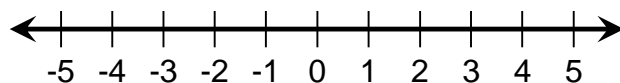
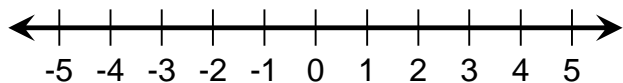
**Opposite numbers** are the same distance from zero on a number line.

Determine the opposite of the numbers.

1. -5

2. 4

Locate the opposites on the number line.



## Make Connection

Students, you already know how to determine the opposite of a number. Now, we will use the opposite of numbers to add and subtract numbers.

**Addition** means to put together.

- On a number line, the **sum** of two numbers is the **location** after moving from the **first addend** a **distance** of the **second addend**.

**Subtraction** means to add the **opposite**.

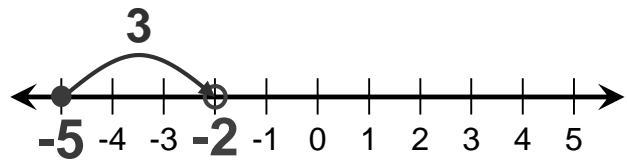
**Addition**

$$a + (\pm b)$$

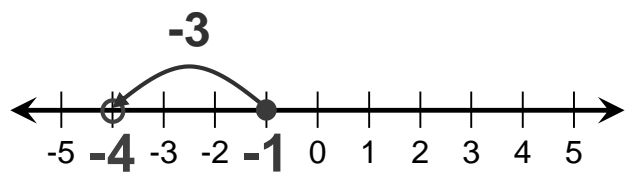
direction ↗ distance ↘

## Addition

$$-5 + 3$$



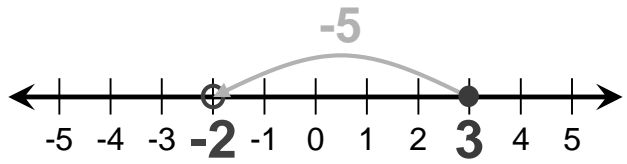
$$-1 + (-3)$$



## Subtraction

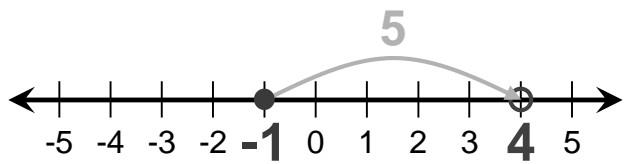
$$3 - 5$$

$$3 + (-5)$$



$$-1 - (-5)$$

$$-1 + (5)$$



**CFU**

Explain how the number line below shows the addition problem  $2 + (-3)$ .

Which is equivalent to the subtraction problem  $7 - (-2)$ ?  
How do you know?  
A  $7 + (-2)$     B  $7 + (2)$

In your own words what does subtraction mean? Subtraction means \_\_\_\_\_.

**Addition** means to put together.

**Subtraction** means to add the **opposite**.

**Add and subtract on a number line.**

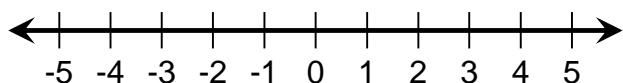
- 1 Rewrite subtraction to add the opposite, if necessary.
- 2 Locate the first addend on the number line.
- 3 Move the distance of the second addend.
- 4 Interpret<sup>1</sup> the answer. "The sum/difference of \_\_\_ and \_\_\_ is \_\_\_."

**Addition**

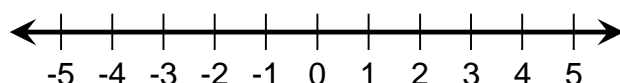
$$a + (\pm b)$$

direction ↗ distance ↖

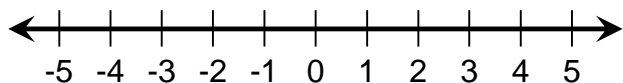
1.  $-3 + 6$



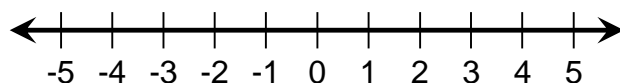
2.  $-4 + 2$



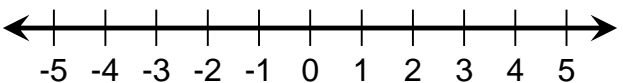
3.  $4 + (-7)$



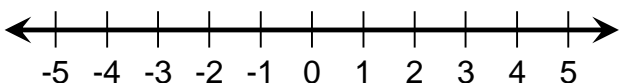
4.  $-2 + (-3)$



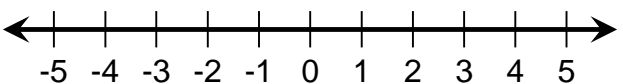
5.  $-2 - 3$



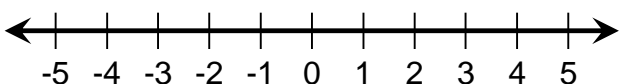
6.  $4 - 7$



7.  $-5 - (-4)$



8.  $2 - (-1)$



**CFU**

- 1 How did I/you rewrite subtraction?
- 3 How did I/you move the distance of the second addend?

**Vocabulary**

<sup>1</sup> explain (synonym)

**Solving Math Problems**

- 1 Determine what the question is asking.**
- 2 Determine the math concept required.**
- 3 Determine relevant information.**
- 4 Solve the problem, then interpret the answer.**
- 5 Check the reasonableness of your answer.**

9. Jesse owes his brother \$7. He gets \$15 for allowance this week. How much money will he have after he pays his brother back?
- 

10. Courtney's class is playing a math game. She starts her turn with -3 points. This turn, she loses 4 points. How many points does Courtney have now?
- 

**CFU**

- 1 How did I/you determine what the question is asking?
- 2 How did I/you determine the math concept required?
- 3 How did I/you determine the relevant information?
- 4 How did I/you solve and interpret the problem?
- 5 How did I/you check the reasonableness of the answer?

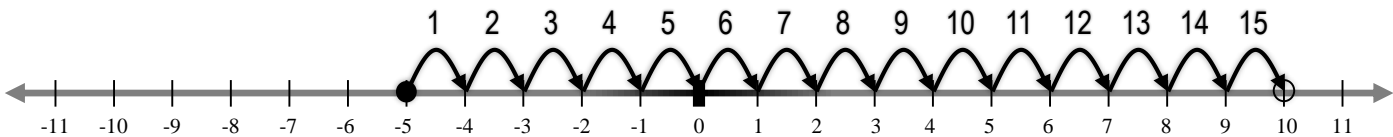
**Addition** means to put together.

**Subtraction** means to add the **opposite**.

**1** *Adding and subtracting on a number line will help you understand positive and negative numbers in the real world.*

**Morning Temperature:  $-5^{\circ}$  F**

**Afternoon Temperature:  $10^{\circ}$  F**



**Temperature Change:  $15^{\circ}$  F**



**2** *Adding and subtracting on a number line will help you do well on tests.*

**Sample Test Question:**

73. Choose Yes or No to indicate whether each expression is equivalent to  $-7 + 5$ .

- |              |                           |                          |
|--------------|---------------------------|--------------------------|
| A $8 - 6$    | <input type="radio"/> Yes | <input type="radio"/> No |
| B $-9 + 7$   | <input type="radio"/> Yes | <input type="radio"/> No |
| C $1 - 3$    | <input type="radio"/> Yes | <input type="radio"/> No |
| D $2 - (-4)$ | <input type="radio"/> Yes | <input type="radio"/> No |

**CFU**

Does anyone else have another reason why it is relevant to add and subtract on a number line? (Pair-Share) Why is it relevant to add and subtract on a number line? You may give one of my reasons or one of your own. Which reason is more relevant to you? Why?

**Addition** means to put together.

**Subtraction** means to add the **opposite**.

### Skill Closure

#### Add and subtract on a number line.

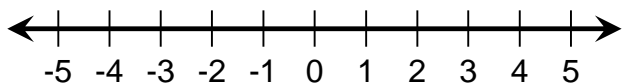
- 1 Rewrite subtraction to add the opposite, if necessary.
- 2 Locate the first addend on the number line.
- 3 Move the distance of the second addend.
- 4 Interpret the answer. "The sum/difference of \_\_\_ and \_\_\_ is \_\_\_."

#### Addition

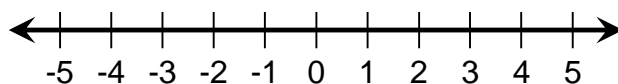
$$a + (\pm b)$$

direction ↗ distance ↖

1.  $-2 + 3$

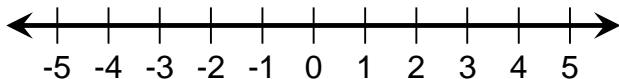


2.  $-1 - (-4)$



### Access Common Core

1. Choose Yes or No to indicate whether each expression is equivalent<sup>2</sup> to  $-3 - (-1)$ .



- |   |             |                           |                          |
|---|-------------|---------------------------|--------------------------|
| A | $2 - 4$     | <input type="radio"/> Yes | <input type="radio"/> No |
| B | $5 + (-3)$  | <input type="radio"/> Yes | <input type="radio"/> No |
| C | $-1 + (-3)$ | <input type="radio"/> Yes | <input type="radio"/> No |
| D | $-4 + 2$    | <input type="radio"/> Yes | <input type="radio"/> No |

#### Word Bank

opposite  
addition  
subtraction  
number line

### Summary Closure

What did you learn today about adding and subtracting on a number line? (Pair-Share)  
Use words from the word bank.

Day 1 \_\_\_\_\_

Day 2 \_\_\_\_\_

#### Vocabulary

<sup>2</sup> equal value

**Addition** means to put together.

**Subtraction** means to add the **opposite**.

**Add and subtract on a number line.**

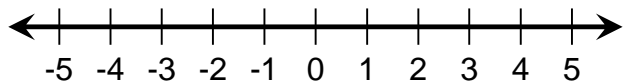
- ① Rewrite subtraction to add the opposite, if necessary.
- ② Locate the first addend on the number line.
- ③ Move the distance of the second addend.
- ④ Interpret the answer. "The sum/difference of \_\_\_ and \_\_\_ is \_\_\_."

**Addition**

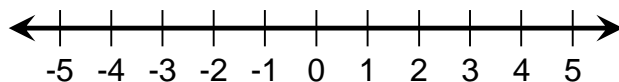
$$a + (\pm b)$$

direction ↗ ↖ distance

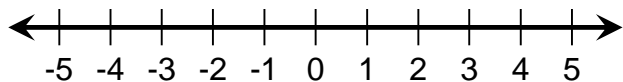
1.  $-5 + 7$



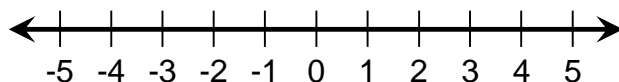
2.  $-1 + (-3)$



3.  $2 - 4$



4.  $-3 - (-1)$



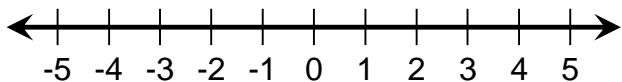
**Solving Math Problems**

- 1 Determine what the question is asking.**
- 2 Determine the math concept required.**
- 3 Determine relevant information.**
- 4 Solve the problem, then interpret the answer.**
- 5 Check the reasonableness of your answer.**

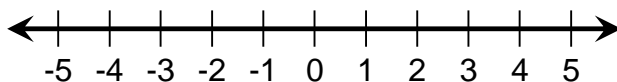
5. This afternoon the temperature was  $-3^{\circ}$  C. By nighttime, the temperature dropped another  $5^{\circ}$  C. What was the temperature at night?
-



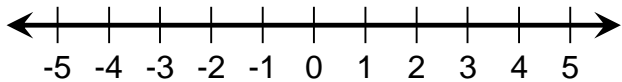
1.  $-1 + 5$



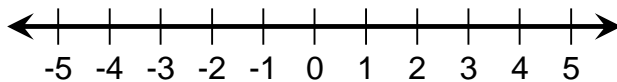
2.  $-3 + -1$



3.  $-4 - (-8)$



4.  $2 - (-3)$

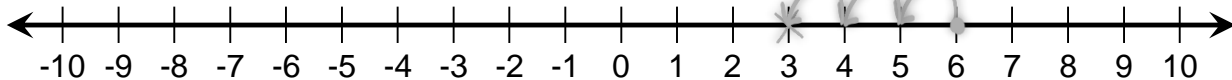


Access Common Core

Describe and correct the errors below in adding and subtracting on a number line.

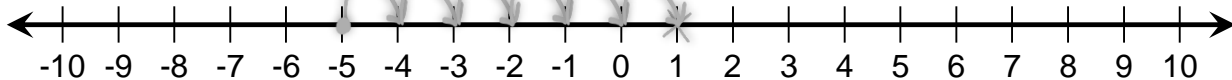
1.  $6 - (-3) = 3$

*-3 -2 -1*

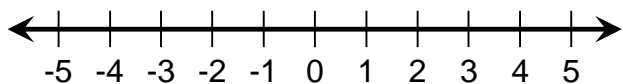


2.  $-5 + (-6) = 1$

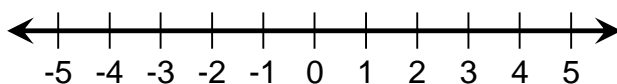
*1 2 3 4 5 6*



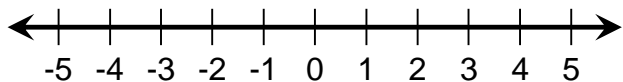
1.  $2 + (-6)$



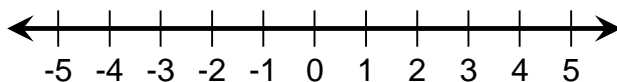
2.  $5 - 7$



3.  $-3 - (-6)$

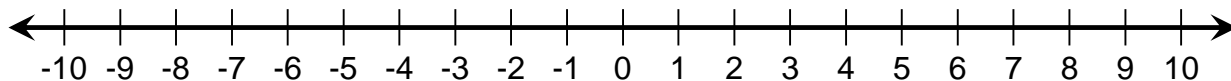


4.  $-1 - (4)$



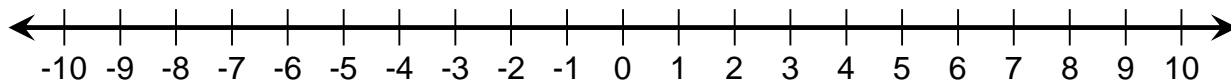
Access Common Core

1. Choose Yes or No to indicate whether each expression is equivalent to  $-9 - (-6)$ .



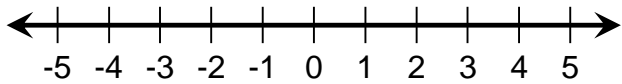
- A  $7 - 10$   Yes  No
- B  $8 + (-11)$   Yes  No
- C  $-5 - (-3)$   Yes  No
- D  $-2 + -5$   Yes  No

2. Choose Yes or No to indicate whether each expression is equivalent to  $6 + (-5)$ .

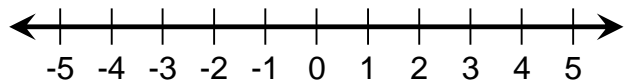


- A  $2 - 1$   Yes  No
- B  $7 - (-8)$   Yes  No
- C  $-3 + (4)$   Yes  No
- D  $-2 + -1$   Yes  No

1.  $-3 + 2$

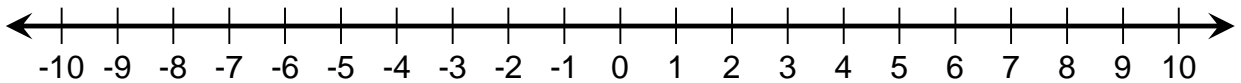


2.  $-1 + -1$



Access Common Core

For each expression, write an addition and a subtraction expression that is equivalent. Explain how you know the expressions are equivalent.



1.  $8 + (-3)$

---



---

2.  $-7 - (-2)$

---



---

3.  $10 + (-4)$

---



---